

SATISH CHANDRA MEMORIAL SCHOOL
HALF YEARLY EXAMINATION (2019-2020)

STD- II SUB: EVS

TIME- 3 hr

Maximum marks-70

NAME _____ SEC _____ ROLL _____

INVIGILATOR'S SIGN: _____ DATE: _____

1. Choose the correct options:

[1x5=5]

i. This is made on the occasion of Eid – ul – Fitr _____

a) cake b) sevain c) pulao

ii. A _____ fixes a broken tap.

a) plumber b) tailor c) draper

iii. People buy medicine at the _____

a) bakery b) chemist c) market

iv. Coriander and mint are examples of _____

a) creepers b) herbs c) climbers

v. A horse lives in a _____

a) kennel b) sty c) stable

2. Write True for the correct statement and False for the wrong one:

[1x3=3]

i. Wood is used for perfumes –

ii. Branches grow on leaves -

iii. A carpenter uses a hammer -

3. Circle the odd one:

[1x3=3]

i. ginger , potato ,pumpkin

ii. envelopes , thread , postcards

iii. jumping , jogging , walking

4. Answer in a word or two:

[1x4=4]

- i. A place in our neighbourhood where we have pleasant meal - _____
- ii. On the day of Christmas , we wish our friends - _____
- iii. This bird can run faster than a horse - _____
- iv. It is known as the fastest- growing woody plant - _____

5. Unscramble the following and answer in a word:

[1x2=2]

- i. This vehicle is used to bring patients to the hospital. (ECNALMABU)- _____
- ii. We build this with dry leaves and rags a day before 'Holi'. (IKALOH IREFNOB)-
_____ .

6. Identify the animals. Colour the domestic animals yellow and wild animals pink.

(4)

G	S	L	R	X	P	P	R	L
R	M	R	X	H	O	R	S	E
S	X	T	L	E	P	E	P	G
S	L	I	O	N	H	S	M	S
X	M	G	R	T	T	H	E	T
S	S	E	I	L	L	E	N	M
G	I	R	A	F	F	E	E	A
O	R	T	P	O	T	P	T	X
A	T	M	N	X	P	M	G	L
T	G	E	P	O	T	L	T	T

7. Give reasons for the following:

[2x2=4]

i) Birds fly

ii.) Climbers need support

8. Give two examples for the following:

[2x2=4]

i. Two insects- _____ , _____

ii. Two cereals - _____ , _____

9. Who am I?

[1x3=3]

i. I am the head of the school. _____

ii. I help you to be safe on the roads. _____

iii. People use me to get silk. _____

10. Fill in the blanks:

[1x6=6]

i. _____ and _____ eat the flesh of dead animals.

ii. We should get on and off a bus only at a _____ .

iii. Your mother's parents are your _____ .

iv. We should stand _____ .

v. A _____ uses a stethoscope.

11. **Answer the following briefly:**

[2x5=10]

i. Who are classmates?

Ans: _____

ii. Why should we not light fire crackers ?

Ans: _____

iii. What do teachers teach us?

Ans: _____

iv..How should we thank the people who help us everyday?.

Ans: _____

v. Write any two good qualities of a good neighbour?

12. Answer the following questions:

[3x3=9]

i. Write any three uses of plants ?

Ans: _____

ii. What is the difference between **domestic** animals and **wild** animals ?


Ans:

iii. How can we take care of our pets?

Ans:

9. Write 3 or 4 sentences on any one festival. Draw and colour related picture to support your answer:


[5]



13. Draw , colour and label the following:


[3x2=6]

i. A shrub and a herb



14.

G Tick (✓) the pictures showing good postures.



(2)