

SATISH CHANDRA MEMORIAL SCHOOL
PERIODIC TEST- II (2019-20)
STD – I SUB – MATHEMATICS

TIME: 2 HRS

MAXIMUM MARKS – 50

Name- _____ Sec- _____ Roll no- _____

INVIGILATOR'S SIGNATURE- _____ Date- _____

Q-1. Do as directed :

1x6=6

i. Expand 852 _____

ii. 2 more than 100 is _____

iii. Put the correct symbol –

21 11 = 10 (+ / - / x)




iv. 3 hundred + _____ + 2 ones = 382




v. There are _____ days in a leap year.

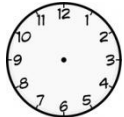
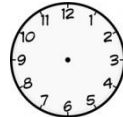
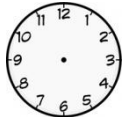
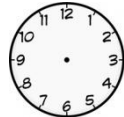
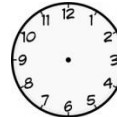
vi. A _____ has no corner.

Q-2. Complete the pattern :

2x3=6

i.  ,  ,  , _____ , _____

ii.  ,  ,  , _____ , _____

iii.  ,  ,  ,  , 

Q-3. Tick (✓) the correct option :

1x6=6

i. How many wheels will 5 bicycles have ?

- a. 20 b. 10 c. 30

ii. In the word 'BLOCK' , the vowel is in _____ place.

- a. second b. third c. fourth

iii. You can do a work in one day. You need _____ hours to finish the same work.

- a. 60 hours b. 24 hours c. 12 hours

iv. Your pencil is _____ than your pencil box.

- a. thinner b. thicker c. both a and b

v. You wake up at 6 o'clock in morning. After 1 hour you go to school. You go to school at -


- a. 7 p.m b. 7 a.m c. 8 p.m

vi. Which month comes just before JANUARY –

- a. November b. December c. February

Q-4. a) Draw the hands of the clock to show the given time :

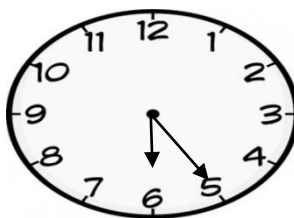
(2)



12 O'Clock

b) write the correct time of the clock :

(1)



Ans: _____

Q-5. Put the correct letters in the given boxes :

(5)

<input type="text"/>	<input type="text"/>	<input type="text"/>	<input type="text"/>	<input type="text"/>
50	30	9	60	8

$$12 \times 5 = P$$

$$H - 40 = 10$$

$$32 + Y = 40$$

$$8 \times P = 72$$

$$10 + 12 + 8 = A$$

Q-6. Multiply :

2x3=6

a) 22

b) 60

c) 32

$\times 4$

$\times 8$

$\times 3$

Q-7. Word Problem :

3x2=6

a) 48 cows and 33 buffaloes are grazing in a field. How many cattles are there in all?

b) You have 126 marbles. Your brother hides a few marbles.112 marbles are left with you. Your brother hides how many marbles?



Q-8. Draw, colour and label it :

2x2=4

a) a fruit bigger than an





is -



b) an animal heavier than a

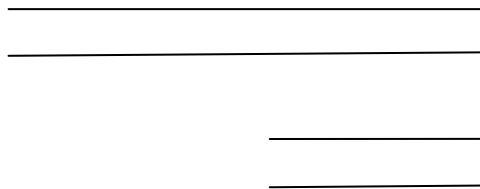


is -




Q-9. Join the given lines and draw a shape and write any 2 properties of it :

3+2=5



Ans:



Properties: 1. _____

2. _____

Q-10. HOTS:

2+1=3

a) Your father told you to buy a matchbox. You bought it and started counting the matchsticks.

There were _____ matchsticks.

a. less than 6

b. more than 200

c. less than 80

b) There were 36 birds on a tree. Your brother threw a stone and all the birds flew away. How many birds are left on the tree?

Ans: _____