

SATISH CHANDRA MEMORIAL SCHOOL

Pre-mid term Examination (2022-23)

Class-I

Subject : Mathematics

Max marks : 50

Time : 2 hours

Name : Section : Roll No :

Invigilator's signature : Date :

OBJECTIVE (30)

Case Study-1

There is a pond near Tony's house. The pond is very big. There are 30 big fishes and 41 small fishes and 18 tadpoles inside the pond. Tony's father catches 13 big fishes and 22 small fishes from the pond.

Tick (✓) the correct option :

(5)

1. There are total _____ fishes in the pond.

- a. 30 b. 41 c. 61 d. 71

2. Tony's father catches total _____ fishes from the pond.

- a. 22 b. 35 c. 39 d. 28

3. The _____ are maximum in number in the pond.

- a. Tadpoles b. Big fishes c. Small fishes d. Crocodiles

Mental Math :

11. If, $2 \times \text{😊} = 10$ and, $4 \times \text{★} = 24$

Then, $\text{😊} + \text{★} = \underline{\hspace{2cm}}$.

- a. 12 b. 20 c. 30 d. 11

12. I am a number between 8 to 12. I am a two digit number. I am less than 11.

I am _____.

- a. 12 b. 10 c. 9 d. 11

13. The missing number is -

30, 27, 24, _____, 18 .

- a. 20 b. 21 c. 15 d. 11

14. Identify the correct descending order :

- a. 34 , 21 , 45 , 31 b. 78 , 90 , 61 , 70 c. 56 , 43 , 21 , 10 d. 12 , 33 , 60 , 72

15. The after number of 25 = (_____ + _____).

- a. (12 + 10) b. (44 + 2) c. (32 + 25) d. (15 + 11)

16. The correct statement is –

- a. $20 = (5 \times 6)$ b. $(2 \times 0) = 2$ c. $(18 + 0) = 0$ d. $(4 \times 8) = (32 + 0)$

17. (1 more than 7 + 1 less than 9) = (____ x ____).

- a. (3 x 5) b. (2 x 7) c. (4 x 4) d. (5 x 2)

18. $(1 \times 5) \times (2 \times 5) = \underline{\hspace{2cm}}$.

- a. 20 b. 30 c. 50 d. 10

19. " One hundred and twenty six " – is the number name of

- a. 204 b. 121 c. 226 d. 126

20. $(4 \times 9) =$ The before number of $\underline{\hspace{2cm}}$.

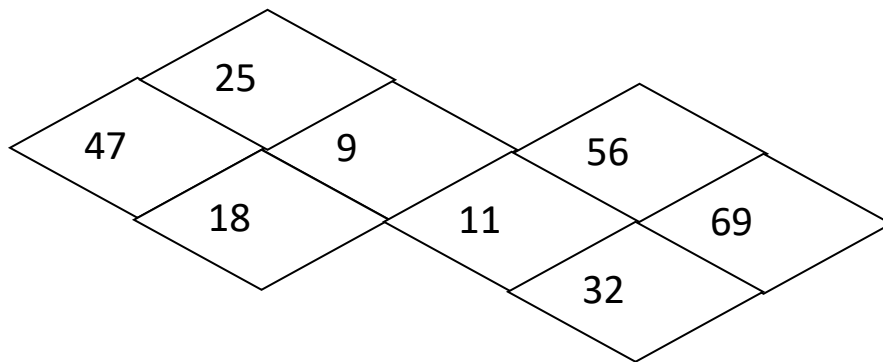
- a. 32 b. 36 c. 37 d. 31

21. (forty three + fifty five) = $\underline{\hspace{4cm}}$.

- a. ninety eight b. seventy eight c. fifty six d. sixty eight

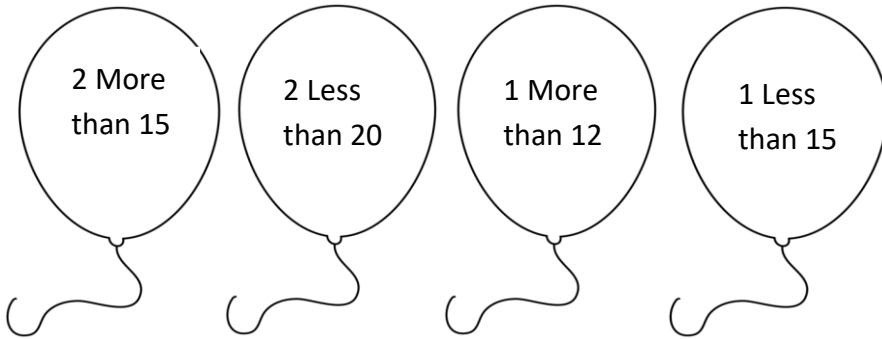
Reasoning :

22. How many numbers are there in the figure which are less than 40 ?



- a. 3 b. 4 c. 5 d. 6

23. Identify the biggest number -



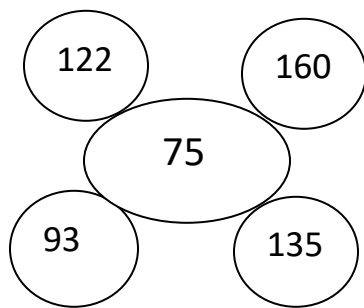
- a. 2 more than 15 b. 2 less than 20 c. 1 more than 12 d. 1 less than 15

24. Identify the odd one -



- a. 18 b. 114 c. 26 d. 30

25. Identify the numbers which lie between 100 to 150 and add them –



Ans : _____ .

- a. 240 b. 262 c. 257 d. 245

General Math :

26. 17 lies between _____ and _____ .

- a. 18 , 20 b. 18, 17 c. 16 ,18 d. 17 ,19

27. The sum of 4 and 6 is -

- a . 11 b. 12 c. 10 d. 9

28. The after number of 17 = (3 × _____) .

- a. 4 b. 6 c. 7 d. 5

29. 1 less than 26 is _____ .

- a. 24 b. 25 c. 27 d. 28



30. (2 × _____) = (3 × 4) .



- a. 5 b. 6 c. 8 d. 7

SUBJECTIVE = 20

1) Put the correct sign (<, >, =):-

(1 x 2 = 2)

a)  

b)  

2) Mixed table :-

(1 x 2 =2)

a) 5 X 3 =

b) $4 \times \square = 16$

3) a) Write in ascending order :-

(1 x 2 = 2)



20 , 21 , 12 , 9 , 22



b) Write in descending order :-



19 , 99 , 90 , 98 , 92

4) Solve it :-

(2)

 +  = 4

 +  = 5

 +  =

5) Addition :-

(1 x 3 = 3)

a) T O

2 1
+ 7 6

b) T O

4 3
+ 5 5

c) T O

3 4
+ 6 5

6) a) Write in number :-

(1 x 3 = 3)

One hundred and twenty three _____

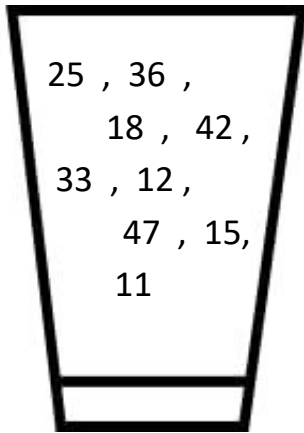
b) Write in words :-

114 - _____

c) Write true or false :-

$5 \times 9 = 40$

7) Find out the smallest number and biggest number from the given figure and add them :-
($1 + 1 + 1 = 3$)



8) How many lotus are there , count and write it in words: – ($1 + 2 = 3$)

