

SATISH CHANDRA MEMORIAL SCHOOL

PRE MID TERM EXAMINATION 2025 – 26

STD – I

SUBJECT : MATHEMATICS

Time – 1 hour 40 mins

Maximum Marks – 40

Name : _____ Roll No. _____ Sec: _____

Invigilator's Signature : _____ Date : _____

OBJECTIVE (25)

Case study – I

Yesterday was my birthday. This time my father gave me 22 pencils, my mother gave me 15 crayons and my sister gave me 11 storybooks. I was very happy with all those gifts.

Tick (✓) the correct option :-

(1×5=5)

1) Total number of gifts I have received -

- a) 49 b) 50 c) 48 d) 58

2) Who gave maximum number of gifts?

- a) sister b) father c) mother d) teacher

3) Add the number of story books and pencils.

- a) 30 b) 33 c) 17 d) 51


4) The number of gifts in descending order.

- a) Story books, crayons, pencils b) Pencils, story books, crayons
c) Pencils, crayons, story books d) Crayons, story books, pencils

5) My mother gave me _____ crayons.

- a) (3 x 3) b) (5 x 5) c) (3 x 9) d) (3 x 5)

Case study – 2



Observe the picture and tick (✓) the correct option :-

(1×5=5)

6) Count the number of animals in the picture who gives us milk

a) (10+1)

b) (10+4)

c) (10+10)

d) (10+0)

7) Tick the correct sign:- (>, <, =)

number of dogs _____ number of goats

a) =

b) <

c) >

d) +

8) Add the number of ducks and the number of birds :-

a) (5 x 4)

b) (4 x 9)

c) (5 x 5)

d) (2 x 8)

9) Tick the number of animals in ascending order.

a) birds , ducks, cows, goats, dogs

b) cows, goats, ducks, birds, dogs

c) ducks, cows, birds, dogs, goats

d) dogs, goats, cows, ducks, birds

10) Choose the total number of animals from the picture in words-

a) forty-one

b) forty

c) forty -five

d) forty- three

Mental Maths

(1×5=5)

11) The after number of (2+5) _____

a) 8

b) 7

c) 6

d) 10

12) $2 + 3 + 2 =$ _____

a) $(8+0)$

b) $(7+0)$

c) $(9+1)$

d) $(0+0)$

13) Put the correct sign : (3×3) _____ (3×6)

a) $>$

b) $<$

c) $=$

d) 0

14) $5 \times 0 =$ _____

a) 50

b) 1

c) 5

d) 0

15) The after number of 106 is _____

a) 107




b) 106


c) 105


d) 100


Tick the correct option:-


(1x5=5)

16)  +  = 

a) 

b) 

c) 

d) 

17) Tick the biggest number

a) 17

b) 77

c) 70

d) 71

18) $5 \times 5 =$ _____

a) 20

b) 25

c) 10

d) 5

19) 32 is the after number of _____

a) 29

b) 30

c) 33

d) 31

20) The number name of 141 is _____

a) One hundred and forty one

b) One hundred and fourteen

c) One hundred and fourty one

d) One hundred and forteen

Reasoning:-

(1 x 5 =5)

Tick the correct option:-

21)  = 3 , Then  +  +  = ?


a) 9

b) 2

c) 4

d) 3

22)





a) 7

b) 9

c) 10

d) 18

23)  = 2 and  = 6

Then  x  = ?

a) 3

b) 8

c) 12

d) 10

24) If C = 8 and S = 0

Then C x S = ?

a) 2 x 0

b) 8 x 1

c) 8 + 1

d) 8 + 0

25) If

C = 2 , B = 6, E = 3, D = 9

Then B + E = _____

a) 6

b) 9

c) 3

d) 8

SUBJECTIVE (15)

Solve it :-

(1 x 2 = 2)

$$\begin{array}{r} 26) \quad T \quad O \\ \quad 2 \quad 2 \\ + 7 \quad 6 \\ \hline \end{array}$$

$$\begin{array}{r} 27) \quad H \quad T \quad O \\ \quad 1 \quad 2 \quad 3 \\ + \quad \quad 2 \quad 4 \\ \hline \end{array}$$

Fill in the blanks :-

(1 x 3 = 3)

28) $63 + 15 =$ _____


29) $4 \times 0 = 5 \times$ _____

30) The sum of 8 and 2 is _____

Read, solve and write


(1 x 2 = 2)

31)



How many total mangoes are there in the given picture ? _____

32)



How many fishes are there in the pond ?

HOTS:-

(1x2=2)

33) I am one digit number. I come after six and before eight.

Who am I ? _____

34) If $2 + T = 4$

Then $T + T =$ _____

Word Problem

(2x3=6)

35) I have 25 fruits. My mother gives 34 fruits more. How many total fruits do I have now?

36) There are 17 red apples and 61 green apples in the basket. How many total fruits are there in the basket

