

SATISH CHANDRA MEMORIAL SCHOOL

PRE MID TERM EXAMINATION (2025 - 26)

STD - II

SUBJECT - MATHEMATICS

Time – 1 hour 40 mins.

Maximum Marks – 40

Name _____ Sec _____ Roll no. _____

Invigilator's Sign _____

OBJECTIVE (25 MARKS)

Case Study –1

(1×5 = 5)

Mira and her family went on a picnic. They packed 46 sandwiches, 56 fruits, 21 cakes and 32 cold drinks. They spread a blanket on the grass and Mira gave 8 fruits and 4 sandwiches to the monkey.

Tick the correct option.

1) How many fruits were left after Mira gave them to the monkey?

- a) 47 b) 48 c) 49 d) 50

2) How many types of food items are there in the picnic?

- a) 2 b) 3 c) 4 d) 5

3) Cold drinks were greater in number than _____.

- a) Sandwiches b) Fruits c) Cakes d) Cold drinks

4) Which food were odd in number?

- a) Sandwiches b) Fruits c) Cakes d) Cold drinks

Rough

5) Arrange the items in ascending order.

- a) Cakes, Fruits, Sandwiches, cold drinks
- b) Cakes, Cold drinks, Fruits, Sandwiches
- c) Fruits, Cakes, Cold drinks, Sandwiches
- d) Cakes, Cold drinks, Sandwiches, Fruits

Case Study – 2

(1×5 = 5)

Two friends, Jay and Bijay, went to the nursery to buy some plants. Jay had ₹46 with him and Bijay had ₹37 with him. Jay wanted to buy a mango tree which cost ₹25. He gave ₹30 to the shopkeeper. Bijay bought two money plant for ₹14 each.

Tick the correct option.

6) What is the total cost of two money plant?

- a) ₹44 b) ₹28 c) ₹24 d) ₹ 26

7) How many 10 rupees note needed for Rs 30?

- a) 1 b) 2 c) 3 d) 4

8) How much money did Jay get back from the shopkeeper?

- a) ₹5 b) ₹10 c) ₹15 d) ₹20

9) How much money did they take to the nursery in total?

- a) ₹80 b) ₹81 c) ₹82 d) ₹83

10) How much money is left with Bijay after shopping?

- a) ₹7 b) ₹8 c) ₹9 d) ₹10

Rough

11) How many months end with the letter “r”?

- a) 2 b) 3 c) 4 d) 5

12) Find the missing number in the given pattern:

220, 210, _____, 190, 180

- a) 100 b) 200 c) 170 d) 205

13) Subtract the face value of 6 from the place value of 6 in 564.

- a) 51 b) 52 c) 53 d) 54

14) How much is 3 hundreds 0 ten and 7 ones?

- a) 307 b) 407 c) 207 d) 507

15) Put the correct sign (<, >, =)

(23 + 27) _____ (32 + 28)

- a) < b) = c) > d) +

16) 0 subtract from 47.

- a) 48 b) 47 c) 0 d) 1

17) _____ is the before number of 377?

- a) 379 b) 378 c) 377 d) 376

18) Which is the smallest two-digit number?

- a) 10 b) 9 c) 99 d) 100

19) Which of the smallest ODD number between 62 to 76?

- a) 61 b) 65 c) 67 d) 63

20) How many 5-rupee coin makes 20 rupees?

- a) 6 b) 5 c) 4 d) 9

Rough

Reasoning

(1×5=5)

21) Complete the number series:

6, 12, 18, 24, _____

- a) 36 b) 30 c) 35 d) 38

22) Which subtraction gives same value as $55-42$?

- a) $64-52$ b) $76-63$
c) $59-43$ d) $47-33$

23) Which one of the following is wrong?

- a) two tens = 20 b) zero ten = 10
c) four tens = 40 d) nine tens = 90

24) If PQR = RQP then MNO = _____

- a) NMO b) NOM c) ONM d) OMN

25) $(14 \times 5) = (10 \times \text{_____})$

- a) 5 b) 6 c) 7 d) 8

Subjective (15 Marks)

Solve

(1×2=2)

1) Arrange and add ₹385 and ₹243

2) Arrange and subtract 176 from 432

Rough



Word problem

(3×2=6)

1) My book has 342 pages. I have read 123 pages. How many pages are left to read?

2) Arun has 152 pencils. Ruby has 254 pencils. How many pencils do they have in total?

(2)

Rani and Shreya were playing a card game. Each  = 10 points and each  = 1 point




Rani got      

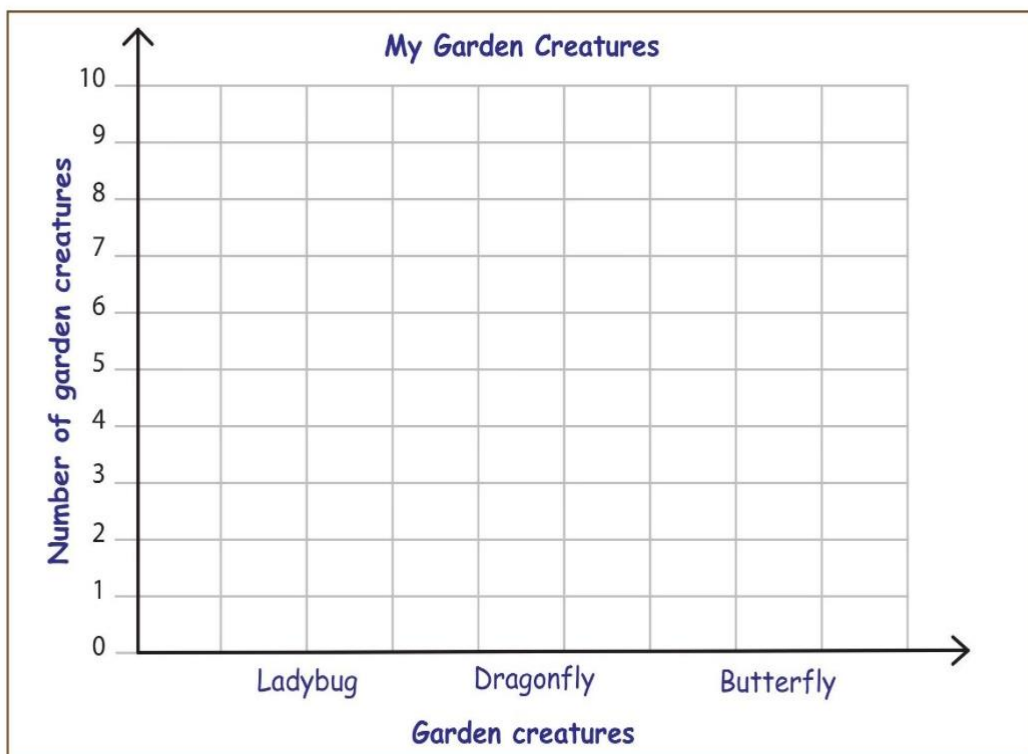
Shreya got     

Therefore, _____ is the winner.

Graph - Garden Creatures

Mily collected a data of garden creatures that she saw while walking through her garden.
Help Mily to draw a bar graph to represent the data.

Ladybug	Dragonfly	Butterfly
		
7	5	9



Answer the following questions:

- 1) Which creature did she see the most? _____
- 2) How many creatures did she see? _____