

SATISH CHANDRA MEMORIAL SCHOOL

POST MID TERM EXAMINATION 2025 – 26

STD – I

SUBJECT : MATHEMATICS

Time – 1 hour 40 mins

Maximum Marks – 40

Name : _____ Roll No. _____ Sec: _____

Invigilator's Signature : _____ Date : _____

OBJECTIVE (25)

Case Study - 1

Today is Sunday. Reena goes for her music class at 9 o'clock in the morning. After one hour she came home and started her homework. Tomorrow she will celebrate Children's day at school. Her mother bought a carrom board for her.

Read the passage and tick (✓) the correct option:-

(1 × 5 = 5)

1) Reena started her homework at –

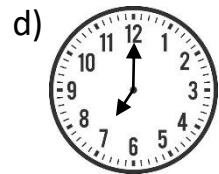
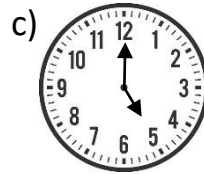
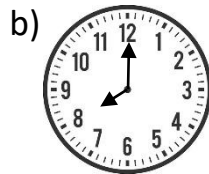
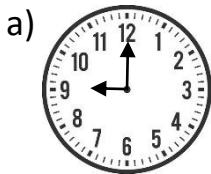
a) 8 o'clock

b) 10 o'clock

c) 7 o'clock

d) 9 o'clock

2) Reena went for her music class at –



3) What is the date today?

a) 13th October

b) 14th January

c) 15th January

d) 13th November

4) Which shape do you observe in carrom board?

a) triangle

b) square

c) circle

d) rectangle

5) Sunday comes in between _____ and _____.

a) Monday and Wednesday

b) Wednesday and Friday

c) Saturday and Monday

d) Tuesday and Thursday

Case Study -2

This time on my birthday I gave 30 fruits to my friend and 15 fruits to my cousin. My father bought 2 cone ice creams, 1 ludo ,1 pencil box and 1 football for me. I started my birthday party after 6 o'clock in the evening.

Read the passage and tick (✓) the correct option:-

$$(1 \times 5 = 5)$$

6) My cousin got _____ fruits than my friend.


- a) more b) equal c) less d) many

7) Which one is the heaviest object that my father bought?

- a) ice cream b) football c) ludo d) pencil box

8) I started my birthday party at –

a)




b)



c)



d)



9) I gave total _____ fruits to my friend and cousin.

- a) (5×10) b) (5×9) c) (5×5) d) (5×8)

10) Which one in the above passage is square in shape?

- a) football b) ludo c) pencil box d) cone ice cream

Mental Math

$$(1 \times 15 = 15)$$

11) The product of 9 and 6 is _____.

12) Circle the biggest number.


- a) (10×4) b) ($32 + 9$) c) (10×5) d) ($59 - 11$)

13) Colour the odd one :-

a)



b)



c)



d)



- 14) $(7 + 12 + 8) - (6 + 10 + 9) =$ _____.
- 15) (8×5) and (10×4) are equal. (yes / no) _____.
- 16) 2 less than 22 is _____.
- 17) 298 is the between number of 297 and _____.
- 18) Double of 33 is _____.
- 19) A square has _____ sides.
- 20) My school starts at _____ o'clock in the morning.
- 21) $8 \times$ _____ $= 0$
- 22) 1 hour = _____ minutes.
- 23) $6 + 8 + 4 + 0 + 9 =$ _____.
- 24) $(\text{Double of } 4) - (\text{Double of } 2) =$ _____.
- 25) $(10 \times 10) + (10 \times 10) =$ _____.

SUBJECTIVE (15)

26) Arrange and solve it :-



(2)

a) $398 - 104$

27) Tick (✓) the heaviest :-

(1)

a)



b)




c)



28) Look at the given time and draw the missing hands :-

(1)

5 o'clock -



29) Fill in the blanks :-

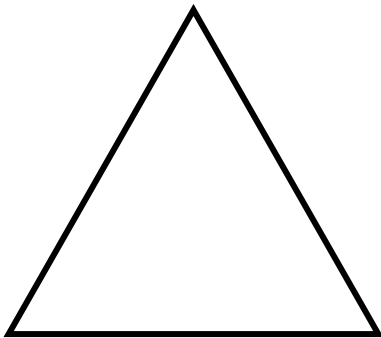
(1 × 2 = 2)

a) 9 times 9 = _____.

b) 1 day = _____ hours.


30) Write the name of the given shape with one property :-

(1 × 2 = 2)




31) Think and Solve :-

(1)



At 12:00, Tina has started her homework. Now it is



1:00. She has finished her

homework. How much time did Tina take to complete her homework?

32) Word Problem :-

(3 × 2 = 6)

a) Irfan has 248 coins. Varun has 116 coins. How many coins do they have altogether?

b) Keshav has 328 game cards in his shop. He sells 215 game cards. How many game cards is he left with?